



















Links herum oder rechts herum?

In jeder Zeile verändern sich die Zeichen schrittweise von Kästchen zu Kästchen. Finden Sie heraus in welche Richtung sich die Zeichen drehen. Wie muss das Zeichen in den leeren Kästchen aussehen?

			→ 1	<input data-bbox="1204 593 1362 752" type="text"/>
			→ 2	<input data-bbox="1204 823 1362 981" type="text"/>
			→ 3	<input data-bbox="1204 1052 1362 1211" type="text"/>
			→ 4	<input data-bbox="1204 1281 1362 1440" type="text"/>
			→ 5	<input data-bbox="1204 1511 1362 1669" type="text"/>
			→ 6	<input data-bbox="1204 1740 1362 1899" type="text"/>